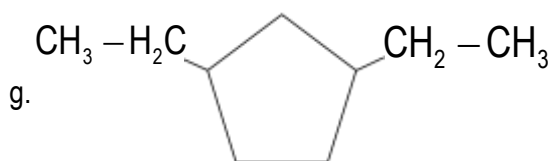
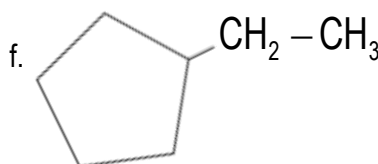
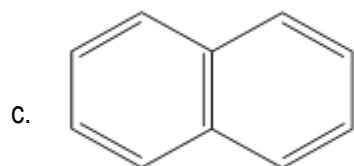
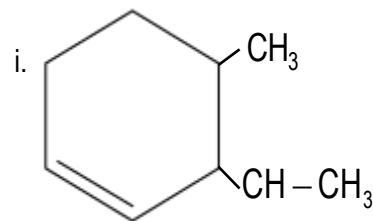
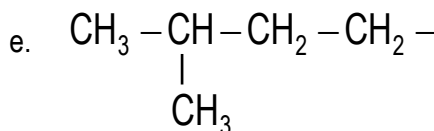
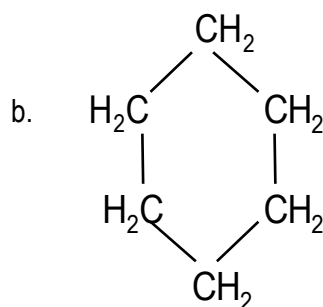
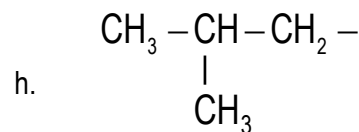
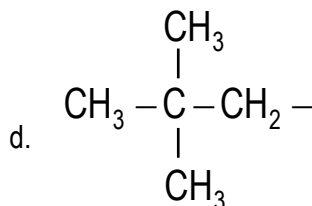
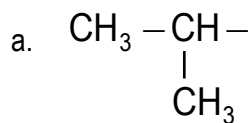
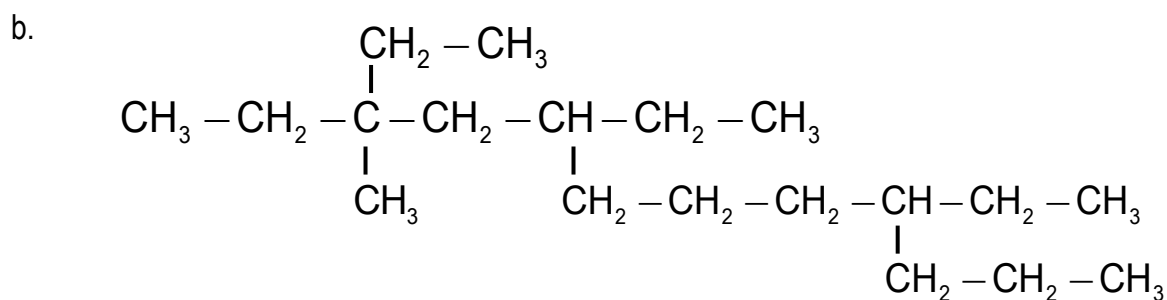
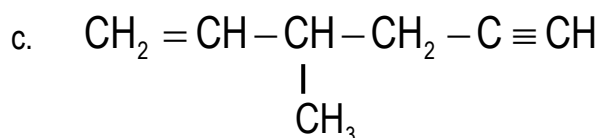
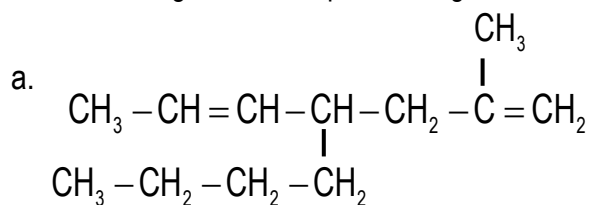


Boletín Reacción Química Orgánica III – 4º E.S.O.

1. Nombra los siguientes compuestos orgánicos.



2. Nombra los siguientes compuestos orgánicos.



3. Formula los siguientes compuestos

a. 2,3,5-trimetil-1,4-octadieno

b. 3-etilciclopenteno

c. 3-etil-1,5-octadieno

d. metilciclohexano

e. metil-1,3-butadieno

f. 2,4,6-trimetilheptano

g. 3-etil-2-metilhexano

h. 3-penten-1-ino