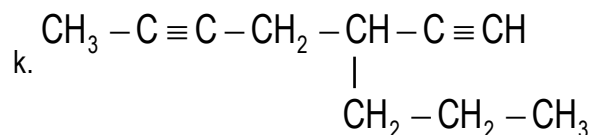
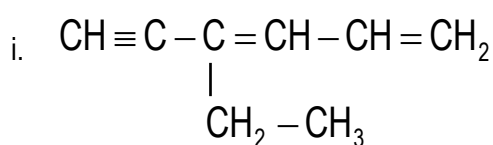
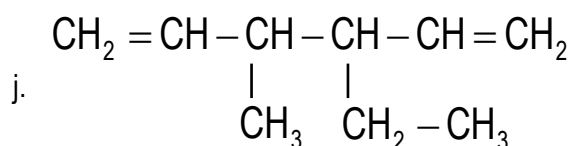
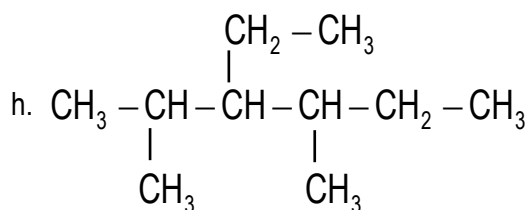
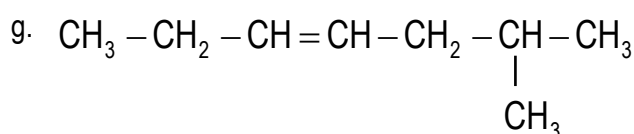
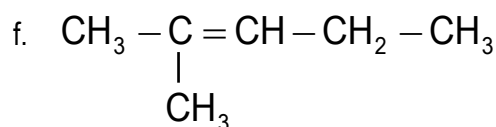
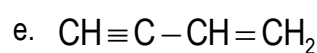
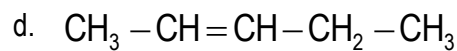
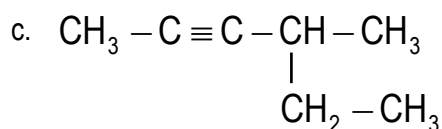
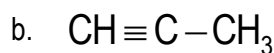
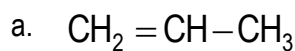


Boletín Reacción Química Orgánica II – 4º E.S.O.

1. Nombra los siguientes compuestos orgánicos.



2. Formula los siguientes compuestos

a. Propino

b. 2-buteno

c. 1-butino

d. 2,2,4-trimetil-pentano

e. 3-propil-1,4-hexadieno

f. 4-metil-1-penteno

g. 1,3,5-hexatrieno

h. 3,3-detil-2,3-hexadieno

i. 3-etil-4-metil-1-penteno

j. 6-metil-3-propil-1,3,5-heptatrieno

k. 1,3-butadieno

l. 4,5-dietil-6-metildecano

m. 2,3-dimetil-butano

n. 4-etil-2-metil-5-propil-octano.

