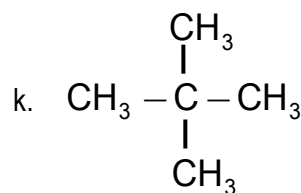
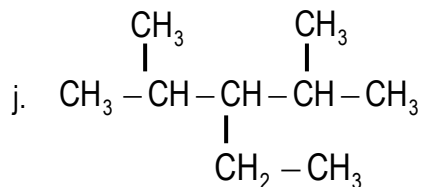
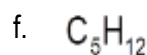
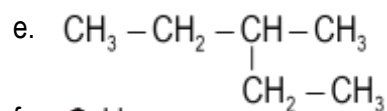
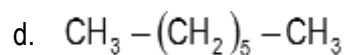
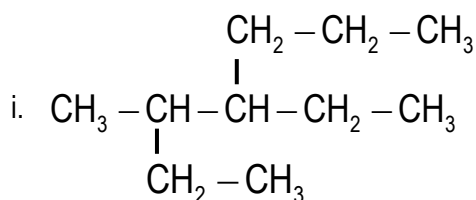
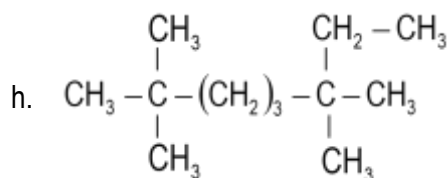
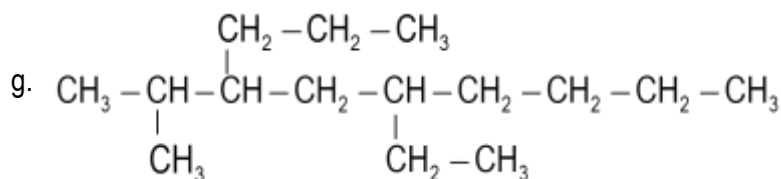
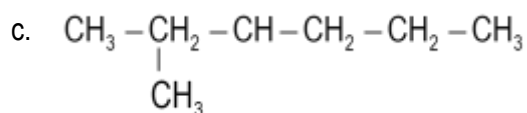
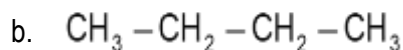
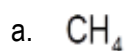


Boletín Reacción Química Orgánica I – 4º E.S.O.

1. Nombra los siguientes compuestos orgánicos.



2. Formula los siguientes compuestos

a. Propano

b. Hexano

c. Etano

d. 2,2,5-trimetilheptano

e. 4-etil-2,4-dimetilhexano

f. 2-propil-3,5-dimetilheptano

g. 4-etil-3-metilheptano

h. 2,2-dimetilbutano

i. 2,3,5-trimetildecano

j. 4-metiloctano

k. 5-etil-2-metilheptano

l. 4,5-dietil-6-metildecano

m. 3-etil-2-metil-4-propilheptano

n. 2-metil-5-etil-hexeno.

